

Marque as distâncias nas escalas indicadas:

a) 8m, 1/100

---

b) 4m, 1/50

---

c) 0.75m, 1/75

---

d) 5.6m, 1/125

---

e) 1.85m, 1/25

---

f) 3.65m, 1/50

---

g) 0.92m, 1/20

---

h) 3.20m, 1/25

---

i) 93m, 1/1250

---

j) 21.5m, 1/200

---

k) 106m, 1/1000

---

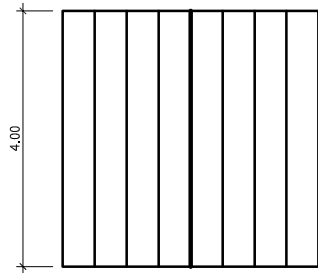
l) 44cm, 1/5

---


m) 248m, 1/2000

---

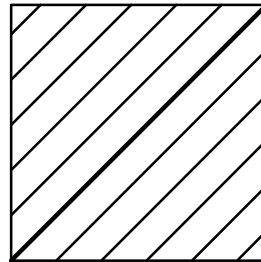
UFF	CTC	TCE	DEPARTAMENTO DE DESENHO TÉCNICO	
01/03	TÉC. GRÁFICAS I		PROF. RODRIGO CURY	
	(NOME DO ALUNO)		DATA:	GRAU:
(TÍTULO DO TRABALHO)			ESC.:	RUBRICA



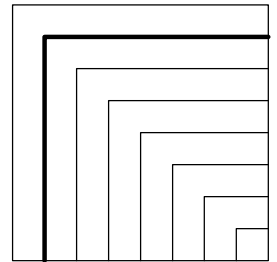
1/50, linha contínua forte



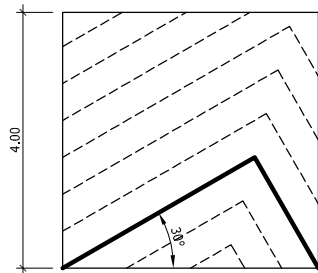
1/100, linha contínua fraca



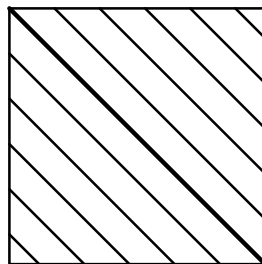
1/125, linha contínua forte



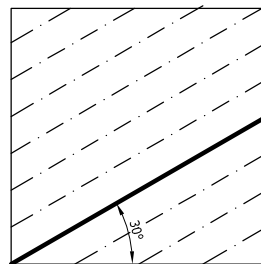
1/75, linha contínua fraca



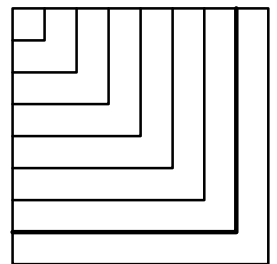
1/50, linha tracejada fraca



1/100, linha contínua forte



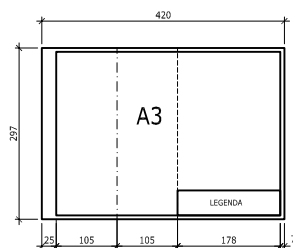
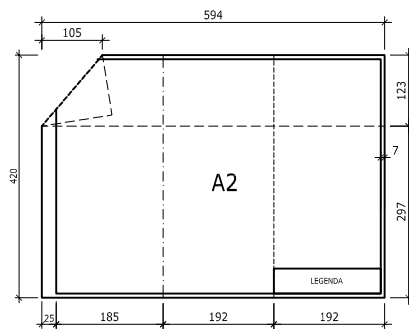
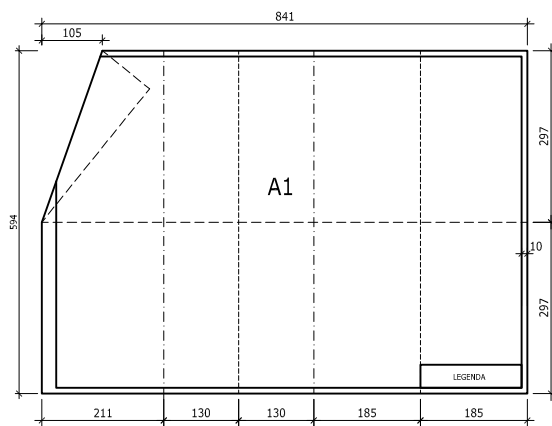
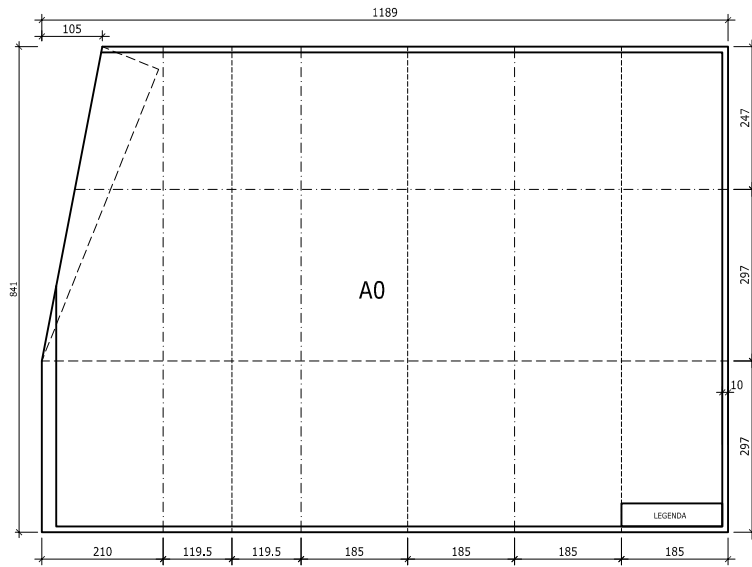
1/125, linha traço e ponto fraca



1/75, linha contínua forte

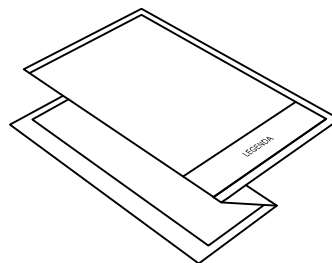
Reproduzir os quadrados de 4.00x4.00m em uma folha A3 com margens e carimbo, nas escalas pedidas e nos tipos e valores de traço indicados, observando a diagramação geral da prancha. A linha contínua grossa indica a linha inicial de cada hachura. As linhas distam 0.50m entre si.

UFF	CTC	TCE	DEPARTAMENTO DE DESENHO TÉCNICO	
02/03	TÉC. GRÁFICAS I		PROF. RODRIGO CURY	
	(NOME DO ALUNO)		DATA:	GRAU:
(TÍTULO DO TRABALHO)			ESC.:	RUBRICA



----- dobrar para trás  
 - - - - - dobrar para frente

Dobrar primeiro as verticais, depois as horizontais. A dobra inclinada, quando houver, é para trás.



UFF	CTC	TCE	DEPARTAMENTO DE DESENHO TÉCNICO	
03/03	TÉC. GRÁFICAS I		PROF. RODRIGO CURY	
	(NOME DO ALUNO)		DATA:	GRAU:
(TÍTULO DO TRABALHO)			ESC.:	RUBRICA